

Name: _____ Date: _____ Addition result

unknown –
sums to 10

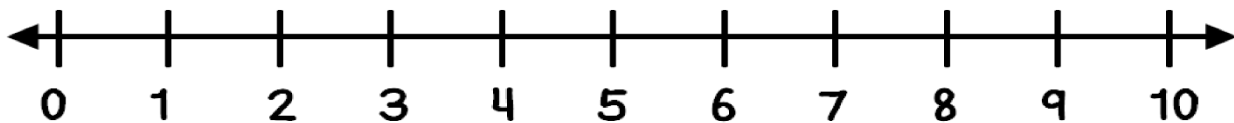
Ann ate 5 apples. Then she ate 3 more.
How many apples did she eat in all?

Draw a picture to show your thinking.

Show your work using ten frames.

| | | | | |
|--|--|--|--|--|
| | | | | |
| | | | | |

Show your thinking on the number line.



Write a number sentence.

___ O ___ O ___

What is your final answer?

Name: _____ Date: _____

Subtraction
result unknown
– sums to 20

While eating watermelon, I saw 18 seeds. I
picked 12 of them out. How many seeds are left?

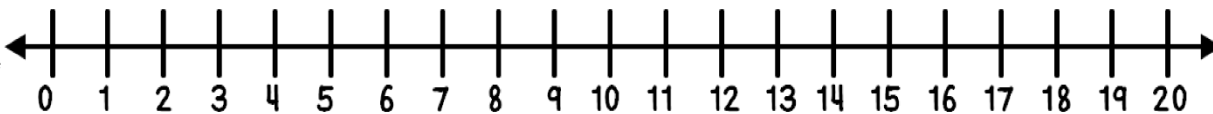
Draw a picture to show your thinking.

Show your work using ten frames.

| | | | | |
|--|--|--|--|--|
| | | | | |
| | | | | |

| | | | | |
|--|--|--|--|--|
| | | | | |
| | | | | |

Show your thinking on the number line.



Write a number sentence.

___ O ___ O ___

What is your final answer?

Name: _____ Date: _____

Addition start
unknown –
sums to 20

I saw a few red birds on a tree. Then, 7 blue birds came. Now there are 12 birds on the tree. How many red birds were on the tree?

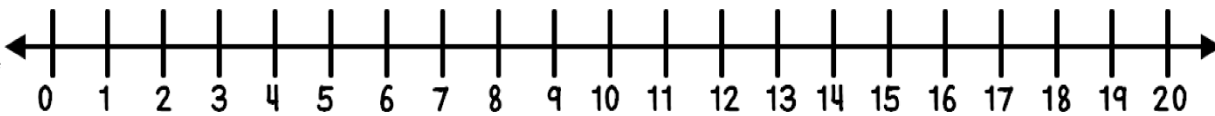
Draw a picture to show your thinking.

Show your work using ten frames.

| | | | | |
|--|--|--|--|--|
| | | | | |
| | | | | |

| | | | | |
|--|--|--|--|--|
| | | | | |
| | | | | |

Show your thinking on the number line.



Write a number sentence.

___ O ___ O ___

What is your final answer?

Name: _____ Date: _____

Subtraction
change
unknown –
sums to 10

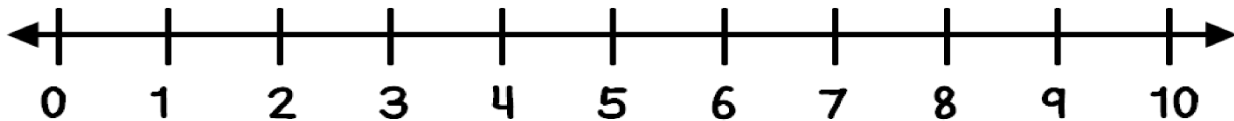
Baby Jim held 7 balloons in his hand. Some of them flew away. Now he only has 2 balloons. How many balloons flew away?

Draw a picture to show your thinking.

Show your work using ten frames.

| | | | | |
|--|--|--|--|--|
| | | | | |
| | | | | |

Show your thinking on the number line.



Write a number sentence.

___ O ___ O ___

What is your final answer?

Name: _____ Date: _____

Subtraction
change
unknown –
sums to 20

Gary had 20 grapes on his plate. He tipped it over and now there are only 12 grapes on his plate. How many grapes fell on the floor?

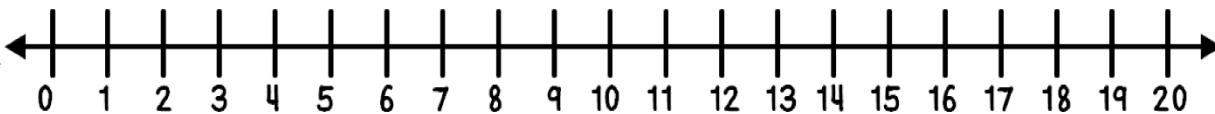
Draw a picture to show your thinking.

Show your work using ten frames.

| | | | | |
|--|--|--|--|--|
| | | | | |
| | | | | |

| | | | | |
|--|--|--|--|--|
| | | | | |
| | | | | |

Show your thinking on the number line.



Write a number sentence.

___ O ___ O ___

What is your final answer?

Name: _____ Date: _____

Addition of 3
addends – sums
to 20

I had a birthday party. 3 adults, 9 girls, and 1 boy came to my party. How many total guests came to my party?

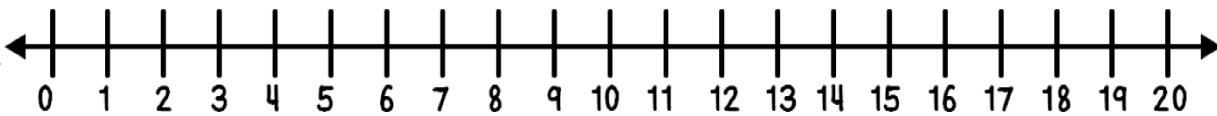
Draw a picture to show your thinking.

Show your work using ten frames.

| | | | | |
|--|--|--|--|--|
| | | | | |
| | | | | |

| | | | | |
|--|--|--|--|--|
| | | | | |
| | | | | |

Show your thinking on the number line.



Write a number sentence.

___ O ___ O ___ O ___

What is your final answer?

Name: _____ Date: _____

Addition within
100: 2 digits
and 1 digit – no
regrouping

When I looked out of my hotel window, I saw
34 fish and 5 dolphins in the ocean. How many
total sea animals did I see?

Draw a picture to show your thinking.

Write a number sentence.

___ 0 ___ 0 ___

What is your final answer?